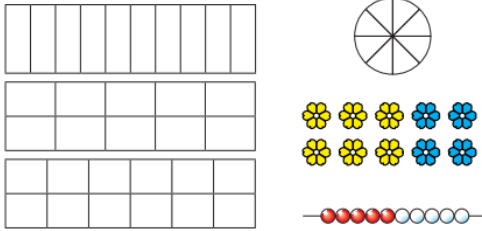


2.2.22

LO - I understand what a tenth is.

1.

Which pictures show tenths?



2. Write fractions to complete the sentences.



a) of the counters are yellow.

b) of the counters are red.

c) of the counters are green.

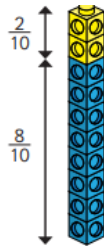
3.

Amir has some blue and yellow cubes.

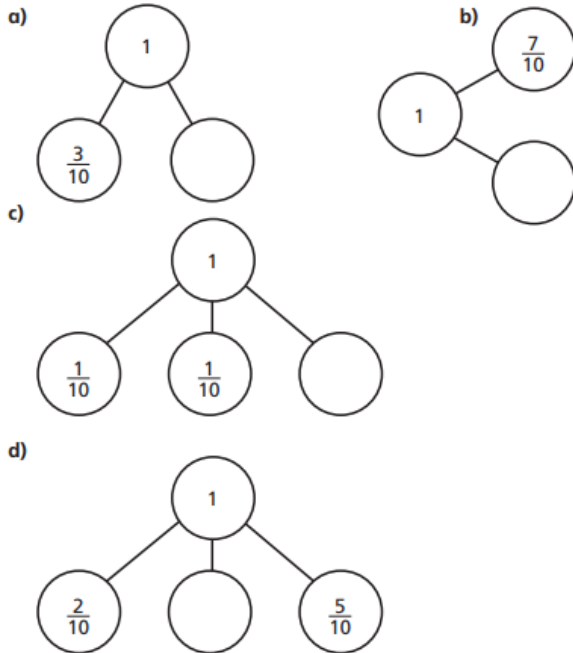
He makes a tower using 10 cubes.

Investigate how many different towers

Amir can make with 10 cubes, if every tower has a different fraction of blue and yellow cubes.



4. Complete the part-whole models.



Odd One Out



Which is the odd one out?

Explain your answer.