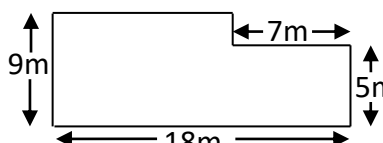




Name: _____

Date: _____

Class/Group: _____

A: Place Value, Add and Subtract			B: Multiply, Divide and Fractions			C: Measure and Problem Solving		
1. What is the value of the 3 in this number? 2,934,765	5:1 30,000		11. Which is a common factor of 18 and 36? 3 4 5 8 10	5:8 3		21. Ben was 0.75 metres tall. Next time he got measured he had grown by $\frac{2}{10}$ of a metre. How tall is he now?	5:19 0.95m or 95cm	
2. Write two hundred and twelve thousand, five hundred in digits.	5:1 212,500		12. Give two prime numbers between 10 and 20.	5:9 11, 13, 17 or 19				
3. Round 163,824 to the nearest thousand .	5:2 164,000		13. $3,472 \div 7$	5:10 496		22. How many grams are there in 6.35 kilograms ?	5:20 6,350	
4. What is the missing number? 2,465 2,365 <input type="text"/> 2,165	5:2 2,265		14. 321.5×100	5:11 32,150				
5. What temperature is 12 degrees less than 2 degrees Celsius?	5:3 -10°C		15. What is 4² ?	5:12 16		23. Calculate the perimeter of this field. 	5:21 54cm	
6. What number is represented by these Roman Numerals? DLXXV	5:4 575		16. $\frac{2}{3} + \frac{2}{9} =$	5:13 $\frac{8}{9}$				
7. $10,750 - 2,925 =$	5:5 7,825		17. Find an equivalent fraction of $\frac{2}{8}$. 	5:14 $\frac{1}{4}$		24. Use the glass to estimate the capacity of this jug. a. 250 ml. b. 300 ml. c. 750 ml. 	5:22 c	
8. $6,495 + 8,912 =$	5:5 15,407		18. Write $\frac{13}{5}$ as a mixed number .	5:15 $2\frac{3}{5}$				
9. Complete this sum without written working. $7,800 + 2,500 =$	5:6 10,300		19. $\frac{3}{4} \times 20 =$	5:16 15		25. Sarah starts watching a film at 10.15am . The film is 145 minutes long. What time does Sarah finish watching the film?	5:23 12.40 (pm)	
10. I buy 2 CDs costing £5.90 each. How much change do I get from £15?	5:7 £3.20		20. Round 4.51 to 1 decimal place.	5:17 4.5				
Total (A)			Total (B)			Total (C)		
Test Total (A+B+C)			R (0-9)		Y (10-19)		G (20-25)	