






10.1.22

LO - I can multiply a 2-digit number by a 1-digit number.

1.

There are 21 coloured balls on a snooker table.
How many coloured balls are there on 3 snooker tables?

Use Base 10 to calculate:
 21×4 and 33×3

Tens	Ones
	
	
	

Complete the multiplications.

2. (c

3.

a)

		T	O
		2	4
	x		2

b)

		T	O
		4	4
	x		2

c) 31×3

d) 42×2

Compare answers with a partner.

4.

One toaster costs £32
How much do 3 toasters cost?



5. Alex completes the calculation:

$$43 \times 2$$

Can you spot her mistake?

	T	O
	4	3
x		2
		6
+		8
	1	4

6.

Teddy completes the same calculation as Alex.
Can you spot and explain his mistake?

	T	O
	4	3
x		2
8	0	6