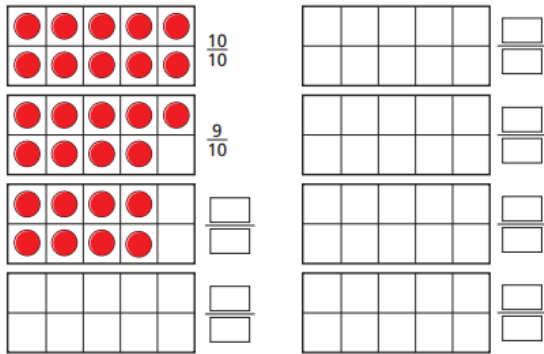


3.2.22

LO - I can count in tenths

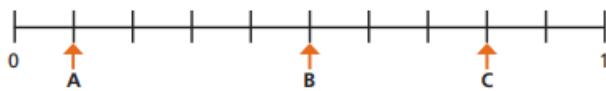
1.

Continue the sequence.

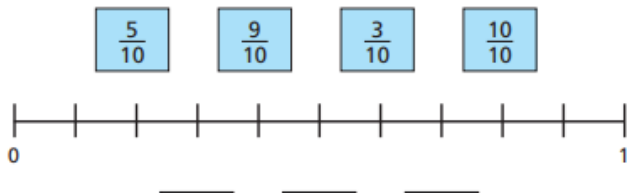


2.

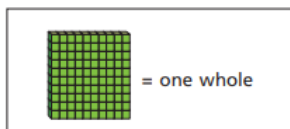
What fraction is each arrow pointing to?




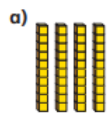
3.



4.



What number is represented in each picture?



5. Teddy is counting in tenths.



Seven tenths, eight tenths, nine tenths, ten tenths, one eleventh, two elevenths, three elevenths...

Can you spot his mistake?

Complete the sequences.

